




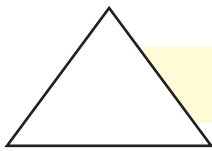
# Data Handling



0119CH09



Count the shapes in the above picture.



Name the shapes

that occurs the most

that occurs the least

## Teachers Note

Refer to page no. 145 to develop understanding of data handling.





These children are friends.

Count the number of letters in each name-word.

Names	Number of letters
S A L M A	<input type="text"/>
J O S E P H	<input type="text"/>
A R U N	<input type="text"/>
C H I N T U	<input type="text"/>
G E E T A	<input type="text"/>
A S H A	<input type="text"/>
S U B B U	<input type="text"/>
A H M A D	<input type="text"/>
R A V I	<input type="text"/>

How many names have four letters

How many names have five letters

How many names have six letters

How many times **S** comes in all the names taken together

How many times **A** comes in all the names taken together